



MATHEMATICAL PROCESSES
K.1.A, K.1.D

ALGEBRA

Share and Show

1







2








3







DIRECTIONS 1–3. Listen to the addition word problem.
Complete the addition sentence.

438 four hundred thirty-eight

Name _____

4







5







6







DIRECTIONS 4–6. Listen to the addition word problem. Complete the addition sentence.



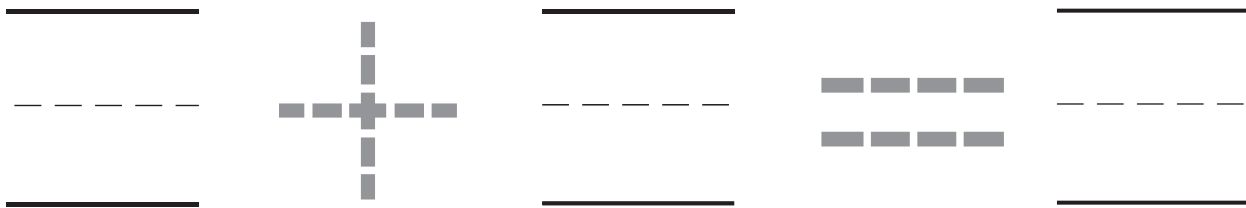
HOME ACTIVITY • Have your child use his or her fingers on two hands to show two numbers and tell how many in all.



Problem Solving



7



Daily Assessment Task

8



$$\bigcirc 5 + 1 = 6 \quad \bigcirc 5 + 2 = 7$$

DIRECTIONS 7. Peter and Grant have six flowers in their garden. Peter has no flowers. How many flowers does Grant have? Color the cube train to show the number pair. Complete the addition sentence. 8. Choose the correct answer. Suzie has five red flowers. She gets one more purple flower. What does the picture show?



Name _____

13.2 Sums Up to 7

ALGEBRA














DIRECTIONS Listen to the addition word problem. Complete the addition sentence.

1. There are 4 orange leaves on a branch. There are 2 red leaves on another branch. How many leaves are there? 2. The flower nursery has three green watering cans. They also have four yellow cans. How many watering cans are there?


3



○ $4 + 2 = 6$

○ $3 + 4 = 7$

4



○ $2 + 4 = 6$

○ $5 + 2 = 7$

DIRECTIONS What does the picture show? Choose the correct answer. **3.** Jackie has 4 pink shells. She gets two brown shells. **4.** There are 5 red books on a shelf. There are also two blue books on the shelf.